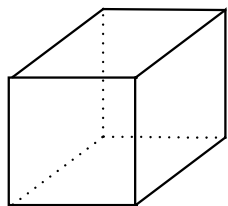


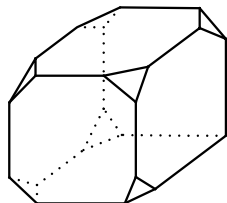
:: Viziune în spațiu

Instrucțiuni: Completați spațiile punctate cu numărul total de fețe al fiecărui corp geometric.

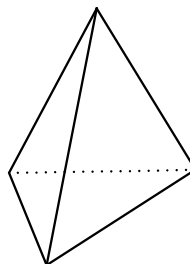
Timp limită: 3 minute



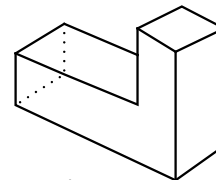
1. ____



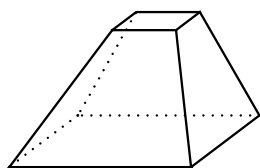
2. ____



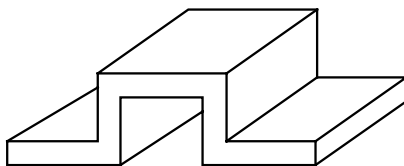
3. ____



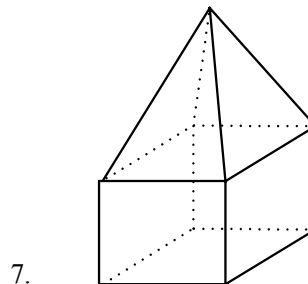
4. ____



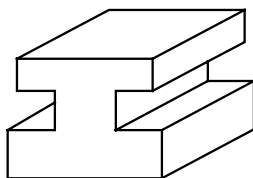
5. ____



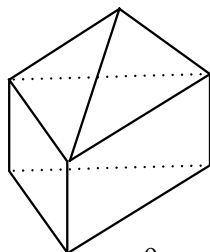
6. ____



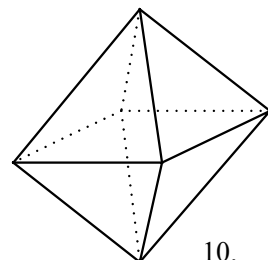
7. ____



8. ____



9. ____



10. ____

:: Soluții viziune în spațiu

1. 6
2. 13
3. 4
4. 8
5. 6
6. 14
7. 9
8. 14
9. 7
10. 8

Adunați câte 2 puncte pentru fiecare răspuns corect.

CLASIFICARE:

Foarte bun	20p
Bun	10p – 19p
Satisfăcător	0p – 9p